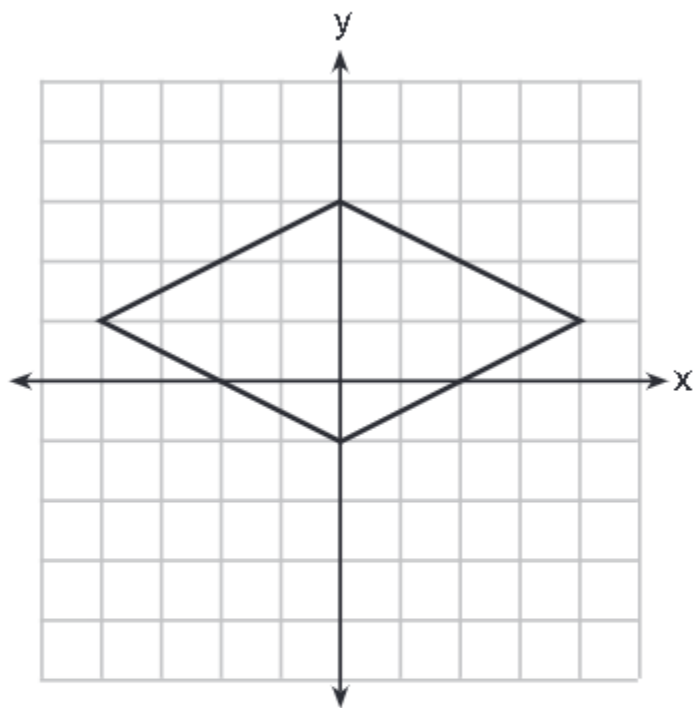


1

A rhombus is graphed on the set of axes below.



Which transformation would carry the rhombus onto itself?

- (1) 180° rotation counterclockwise about the origin
- (2) reflection over the line $y = \frac{1}{2}x + 1$
- (3) reflection over the line $y = 0$
- (4) reflection over the line $x = 0$

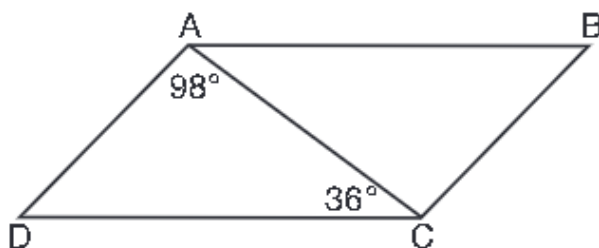
2.

A 15-foot ladder leans against a wall and makes an angle of 65° with the ground. What is the horizontal distance from the wall to the base of the ladder, to the nearest tenth of a foot?

- (1) 6.3 (3) 12.9
(2) 7.0 (4) 13.6

3.

In parallelogram $ABCD$ shown below, $m\angle DAC = 98^\circ$ and $m\angle ACD = 36^\circ$.

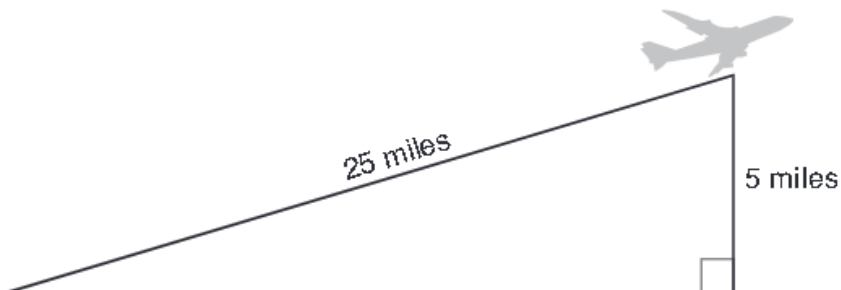


What is the measure of angle B ? Explain why.

Use the back of the answer sheet for your explanation.

4.

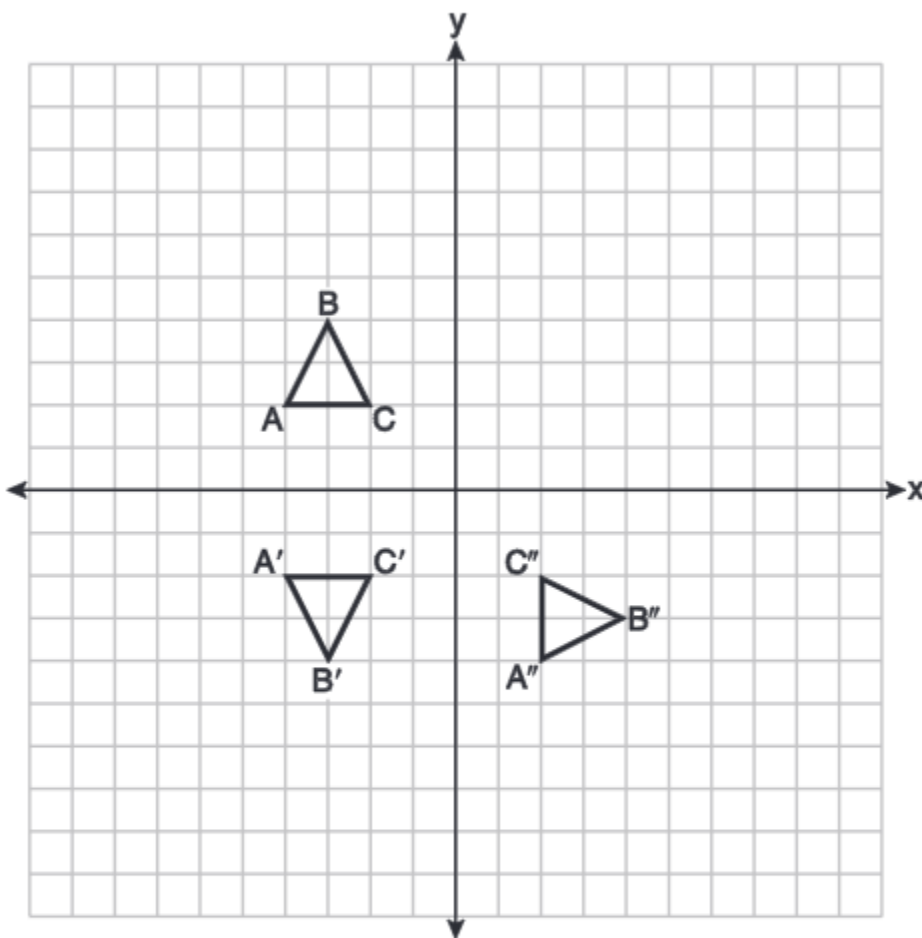
An airplane took off at a constant angle of elevation. After the plane traveled for 25 miles, it reached an altitude of 5 miles, as modeled below.



To the nearest tenth of a degree, what was the angle of elevation?

5.

On the set of axes below, triangle ABC is graphed. Triangles $A'B'C'$ and $A''B''C''$, the images of triangle ABC , are graphed after a sequence of rigid motions.



Identify which sequence of rigid motions maps $\triangle ABC$ onto $\triangle A'B'C'$ and then maps $\triangle A'B'C'$ onto $\triangle A''B''C''$.

- (1) a rotation followed by another rotation
- (2) a translation followed by a reflection
- (3) a reflection followed by a translation
- (4) a reflection followed by a rotation

6.

The table below shows the population and land area, in square miles, of four counties in New York State at the turn of the century.

County	2000 Census Population	2000 Land Area (mi²)
Broome	200,536	706.82
Dutchess	280,150	801.59
Niagara	219,846	522.95
Saratoga	200,635	811.84

Which county had the greatest population density?

- (1) Broome
- (2) Dutchess
- (3) Niagara
- (4) Saratoga

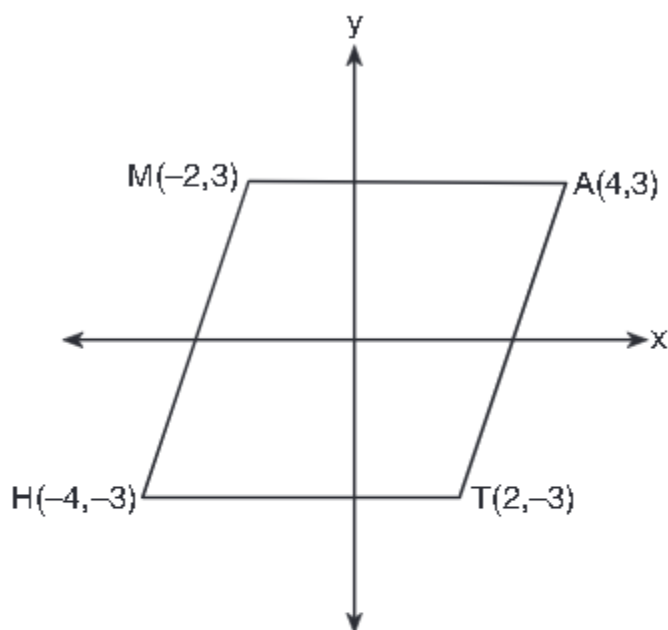
7.

If a rectangle is continuously rotated around one of its sides, what is the three-dimensional figure formed?

- (1) rectangular prism
- (2) cylinder
- (3) sphere
- (4) cone

8.

Which transformation carries the parallelogram below onto itself?



- (1) a reflection over $y = x$
- (2) a reflection over $y = -x$
- (3) a rotation of 90° counterclockwise about the origin
- (4) a rotation of 180° counterclockwise about the origin

9.

After a dilation centered at the origin, the image of \overline{CD} is $\overline{C'D'}$. If the coordinates of the endpoints of these segments are $C(6, -4)$, $D(2, -8)$, $C'(9, -6)$, and $D'(3, -12)$, the scale factor of the dilation is

- (1) $\frac{3}{2}$
- (2) $\frac{2}{3}$
- (3) 3
- (4) $\frac{1}{3}$

10.

A tent is in the shape of a right pyramid with a square floor. The square floor has side lengths of 8 feet. If the height of the tent at its center is 6 feet, what is the volume of the tent, in cubic feet?

(1) 48

(3) 192

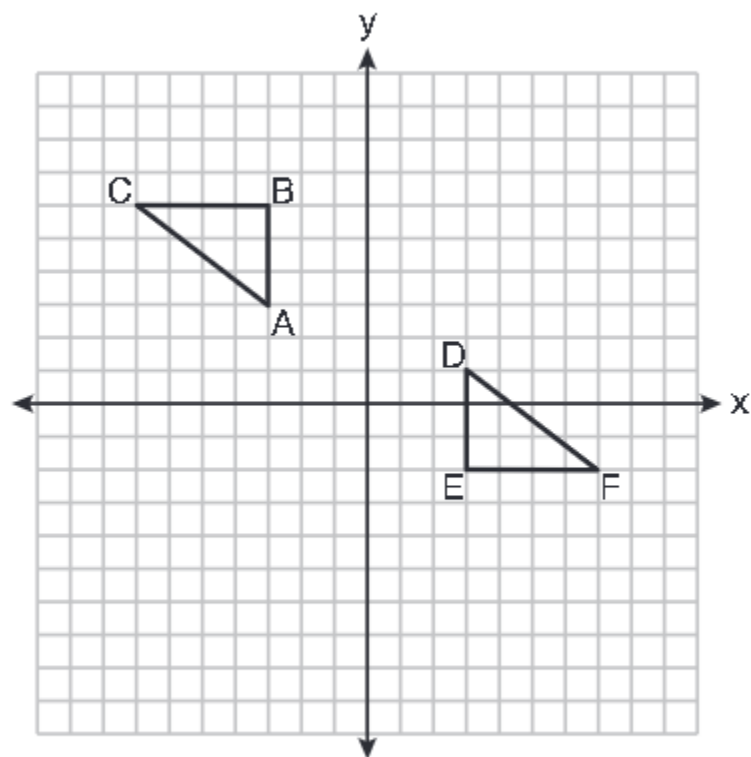
(2) 128

(4) 384

BONUS

11.

On the set of axes below, $\triangle ABC \cong \triangle DEF$.



Describe a sequence of rigid motions that maps $\triangle ABC$ onto $\triangle DEF$.

Converse, Inverse, Contrapositive

Given an if-then statement "if p , then q ," we can create three related statements:

A conditional statement consists of two parts, a hypothesis in the "if" clause and a conclusion in the "then" clause. For instance, "If it rains, then they cancel school."

"It rains" is the hypothesis.

"They cancel school" is the conclusion.

To form the converse of the conditional statement, interchange the hypothesis and the conclusion.

The converse of "If it rains, then they cancel school" is "If they cancel school, then it rains."

To form the inverse of the conditional statement, take the negation of both the hypothesis and the conclusion.

The inverse of "If it rains, then they cancel school" is "If it does not rain, then they do not cancel school."

To form the contrapositive of the conditional statement, interchange the hypothesis and the conclusion of the inverse statement.

The contrapositive of "If it rains, then they cancel school" is "If they do not cancel school, then it does not rain."

Statement	If p , then q .
Converse	If q , then p .
Inverse	If not p , then not q .
Contrapositive	If not q , then not p .

Taken from:

https://www.varsitytutors.com/hotmath/hotmath_help/topics/converse-inverse-contrapositive

High School Mathematics Assessment Reference Sheet

1 inch = 2.54 centimeters
 1 meter = 39.37 inches
 1 mile = 5280 feet
 1 mile = 1760 yards
 1 mile = 1.609 kilometers

1 kilometer = 0.62 mile
 1 pound = 16 ounces
 1 pound = 0.454 kilograms
 1 kilogram = 2.2 pounds
 1 ton = 2000 pounds

1 cup = 8 fluid ounces
 1 pint = 2 cups
 1 quart = 2 pints
 1 gallon = 4 quarts
 1 gallon = 3.785 liters
 1 liter = 0.264 gallons
 1 liter = 1000 cubic centimeters

Triangle	$A = \frac{1}{2}bh$
Parallelogram	$A = bh$
Circle	$A = \pi r^2$
Circle	$C = \pi d$ or $C = 2\pi r$
General Prisms	$V = Bh$
Cylinder	$V = \pi r^2 h$
Sphere	$V = \frac{4}{3}\pi r^3$
Cone	$V = \frac{1}{3}\pi r^2 h$
Pyramid	$V = \frac{1}{3}Bh$

Quadratic Formula	$x = \frac{-b \pm \sqrt{b^2 - 4ac}}{2a}$
Arithmetic Sequence	$a_n = a_1 + (n - 1)d$
Geometric Sequence	$a_n = a_1 r^{n-1}$
Geometric Series	$S_n = \frac{a_1 - a_1 r^n}{1 - r}$ where $r \neq 1$
Radians	1 radian = $\frac{180}{\pi}$ degrees
Degrees	1 degree = $\frac{\pi}{180}$ radians