


# Virginia State Standards of Learning


## Science, Math and Technology Practice Tests

### Question Number 13 of 40 - Algebra I


Which of the following tables does **not** represent a function?

**F** 


$x$	$f(x)$
2	7
3	10
5	16
8	25

**G** 

$x$	$f(x)$
1	2
7	2
-4	2
-5	2

**H** 

$x$	$f(x)$
36	6
36	-6
25	5
25	-5

**I** 

$x$	$f(x)$
0	36
2	38
9	45
20	56

- No answer selected -

[Start over, please!](#)