



Education Home



Teacher Resources



Student Zone



Games & Puzzles



Programs & Events




Search Education

Virginia State Standards of Learning


Science, Math and Technology Practice Tests

Question Number 1 of 40 - Algebra I


Which of the following tables represents a function?

F 


x	y
4	-2
4	0
4	2
4	4

G 

x	y
1	-2
0	0
1	2
4	3

H 

x	y
-1	1
0	0
1	1
2	4

J 

x	y
2	-4
0	2
2	6
4	8

- No answer selected -

Start over, please!